









## Feet and Yards

2.MD.B.5: Use addition and subtraction within 100 to solve word problems involving lengths that are given in the same units.

 <p>less than one yard</p>	 <p>about one yard</p>	 <p>more than one yard</p>
---	---	---

Circle to determine whether each object has length more or less than a yard.

<p>1.</p>  <p>MORE      LESS</p>	<p>2.</p>  <p>MORE      LESS</p>	<p>3.</p>  <p>MORE      LESS</p>
<p>4.</p>  <p>MORE      LESS</p>	<p>5.</p>  <p>MORE      LESS</p>	<p>6.</p>  <p>MORE      LESS</p>




7. Missy bought a garter from the department store for her dress. How long do you think this garter is? Is it more than or less than a yard?

answer: \_\_\_\_\_







# Feet and Yards

## Answer Key

2.MD.B.5: Use addition and subtraction within 100 to solve word problems involving lengths that are given in the same units.

 <p>less than one yard</p>	 <p>about one yard</p>	 <p>more than one yard</p>
---	---	---

Circle to determine whether each object has length more or less than a yard.

<p>1.</p>  <p>MORE <b>LESS</b></p>	<p>2.</p>  <p><b>MORE</b> LESS</p>	<p>3.</p>  <p>MORE <b>LESS</b></p>
<p>4.</p>  <p>MORE <b>LESS</b></p>	<p>5.</p>  <p><b>MORE</b> LESS</p>	<p>6.</p>  <p><b>MORE</b> LESS</p>

7. Missy bought a garter from the department store for her dress. How long do you think this garter is? Is it more than or less than a yard?

answer: more than one yard