

















## 2. MD.D.10 Reading Picture Graphs – Garden Flowers

2.MD.D.10: Draw a picture graph and a bar graph (with single-unit scale).

Look at the picture graph below. Then answer the questions.

### Flowers on Aunt Jenny's garden:

Rose					
Tulip					
Sunflower					
Daisy					
Orchid					

How many more roses does Aunt Jenny have than sunflowers? \_\_\_\_\_

Aunt Jenny has two flowers that are the same in count.  
Write their names. \_\_\_\_\_

How many more daisies than the orchids are there on the garden? \_\_\_\_\_

How many more roses are there than the daisies? \_\_\_\_\_

How many tulips, orchids, and roses does Aunt Jenny have? \_\_\_\_\_

















2. MD.D.10 Reading Picture Graphs – Garden Flowers

Answer Key

2.MD.D.10: Draw a picture graph and a bar graph (with single-unit scale).

Look at the picture graph below. Then answer the questions.

**Flowers on Aunt Jenny’s garden:**

Rose					
Tulip					
Sunflower					
Daisy					
Orchid					

How many more roses does Aunt Jenny have than sunflowers? 3

Aunt Jenny has two flowers that are the same in count.  
Write their names. Sunflowers and orchids

How many more daisies than the orchids are there on the garden? 2

How many more roses are there than the daisies? 1

How many tulips, orchids, and roses does Aunt Jenny have? 10