


2. MD.D.10 Reading Picture Graphs – Popular Pets

2.MD.D.10: Draw a picture graph and a bar graph (with single-unit scale).

Look at the picture graph below. Then answer the questions.

Popular pets in Jasmine's class


Each picture stands for 2 students.



What is the most popular pet? _____

How many more votes for  than for  ? _____

Which pet has 6 votes? _____

How many students voted for the  ? _____

How many students like the  and the  together? _____

2. MD.D.10 Reading Picture Graphs – Popular Pets


Answer Key

2.MD.D.10: Draw a picture graph and a bar graph (with single-unit scale).

Look at the picture graph below. Then answer the questions.

Popular pets in Jasmine’s class

Each picture stands for 2 students.



What is the most popular pet?


Dog

How many more votes for  than for  ?

2

Which pet has 6 votes?

Gold fish

How many students voted for the  ?

4

How many students like the  and the  together?

16