
















2. MD.D.10 Reading Picture Graphs – Samantha's Pens

2.MD.D.10: Draw a picture graph and a bar graph (with single-unit scale).

Look at the picture graph below. Then answer the questions.

Samantha's Pens

Pink					
Green					
Black					
Blue					
Red					

How many red pens does Samantha have? _____

Which color pen does she have the most? _____

How many more blue pens does she have than the pink ones? _____

How many pens does she have in all? _____

How many green and black pens does she have in all? _____
















2. MD.D.10 Reading Picture Graphs – Samantha’s Pens

Answer Key

2.MD.D.10: Draw a picture graph and a bar graph (with single-unit scale).

Look at the picture graph below. Then answer the questions.

Samantha’s Pens

Pink					
Green					
Black					
Blue					
Red					

How many red pens does Samantha have? 3

Which color pen does she have the most? black

How many more blue pens does she have than the pink ones? 2

How many pens does she have in all? 15

How many green and black pens does she have in all? 6