


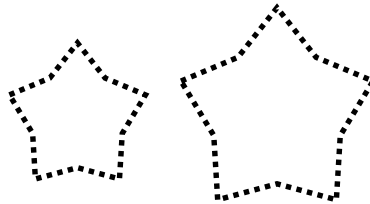
2.G.A.1 Recognize Congruent Shapes (Part 2)

2.G.A.1: Recognize and draw shapes having specified attributes.

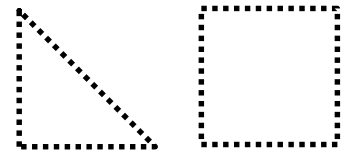
Congruent shapes have the same shape and size.



These figures are congruent.




These figures are NOT congruent.



These figures are NOT congruent.

Look at the pair of figures in each box. Are these two figures congruent? Circle **YES** or **NO**.

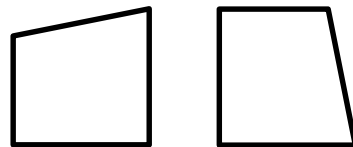
1.



YES

NO

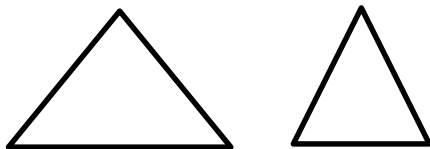
2.



YES

NO

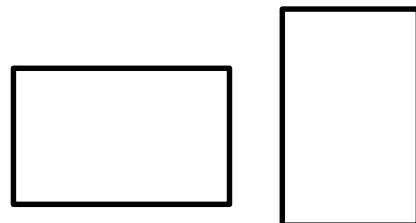
3.



YES

NO

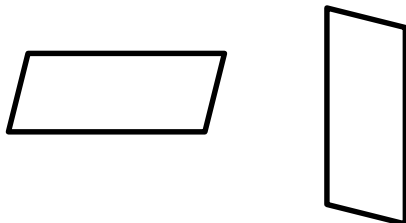
4.



YES

NO

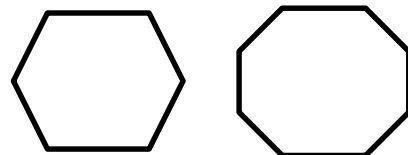
5.



YES

NO

6.



YES


NO

2.G.A.1 Recognize Congruent Shapes (Part 2)

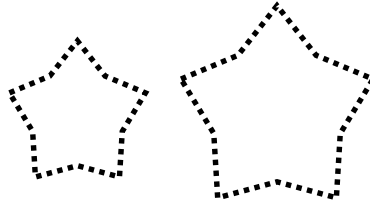
Answer Key

2.G.A.1: Recognize and draw shapes having specified attributes.

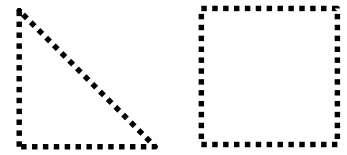
Congruent shapes have the same shape and size.



These figures are congruent.




These figures are NOT congruent.



These figures are NOT congruent.

Look at the pair of figures in each box. Are these two figures congruent? Circle **YES** or **NO**.

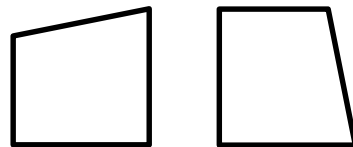
1.



YES

NO

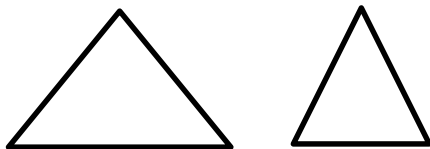
2.



YES

NO

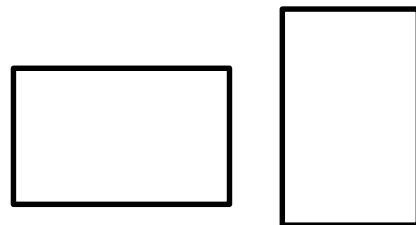
3.



YES

NO

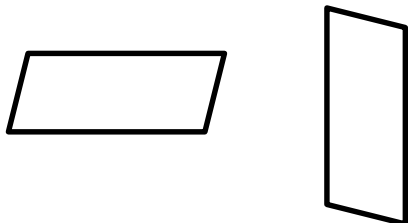
4.



YES

NO

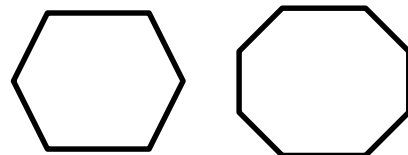
5.



YES

NO

6.



YES

NO