

2.G.A.3 Partition Shapes Into Two Equal Shares

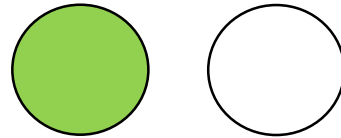
2.G.A.3: Partition circles and rectangles into two, three, or four equal shares.

One – half of the whole is shaded.




$$\frac{1}{2} = 1 \text{ out of } 2 \text{ equal parts}$$

One – half of the set is shaded.

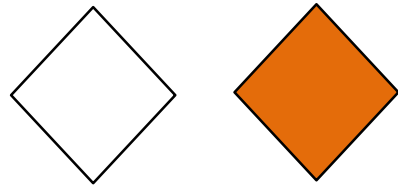


$$\frac{1}{2} = 1 \text{ out of } 2 \text{ items in the set}$$

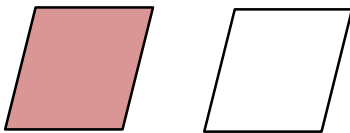
Complete



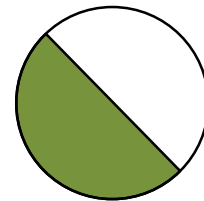
There are ___ equal parts.
 ___ of the part is shaded.
 ___ of the shape is shaded.



There are ___ in the set.
 ___ of the items is shaded.
 ___ of the set is shaded.



There are ___ in the set.
 ___ of the items is shaded.
 ___ of the set is shaded.



There are ___ equal parts.
 ___ of the part is shaded.
 ___ of the shape is shaded.

2.G.A.3 Partition Shapes Into Two Equal Shares

Answer Key

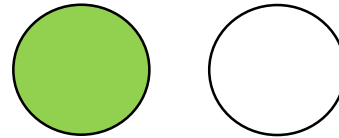
2.G.A.3: Partition circles and rectangles into two, three, or four equal shares.

One – half of the whole is shaded.




$$\frac{1}{2} = 1 \text{ out of } 2 \text{ equal parts}$$

One – half of the set is shaded.



$$\frac{1}{2} = 1 \text{ out of } 2 \text{ items in the set}$$

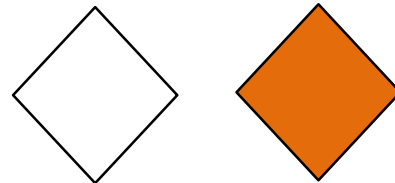
Complete



There are 2 equal parts.

1 of the part is shaded.

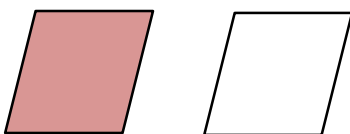
$\frac{1}{2}$ of the shape is shaded.



There are 2 in the set.

1 of the items is shaded.

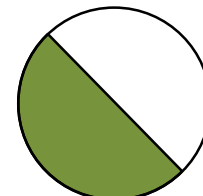
$\frac{1}{2}$ of the set is shaded.



There are 2 in the set.

1 of the items is shaded.

$\frac{1}{2}$ of the set is shaded.



There are 2 equal parts.

1 of the part is shaded.

$\frac{1}{2}$ of the shape is shaded.