

2.MD.A.1 Estimating Lengths Using Nonstandard Units

2.MD.A1: Measure the length of an object by selecting and using appropriate tools.






Objective: Measure length using nonstandard units.

Example:



The length of the highlighter pen is about 5 paper clips.

Use paper clip. Measure the real objects.

Find the object	Measure
1.  Wallet	about _____ paper clips
2.  Pencil	about _____ paper clips
3.  Apple	about _____ paper clips
4.  Chocolate bar	about _____ paper clips
5.  Book	about _____ paper clips

2.MD.A.1 Estimating Lengths Using Nonstandard Units

Answer Key

2.MD.A1: Measure the length of an object by selecting and using appropriate tools.

Objective: Measure length using nonstandard units.






Example:



The length of the highlighter pen is about 5 paper clips.



Use paper clip. Measure the real objects.

Find the object		Measure
1.	 <p>Wallet</p>	Answers may vary
2.	 <p>Pencil</p>	Answers may vary
3.	 <p>Apple</p>	Answers may vary
4.	 <p>Chocolate bar</p>	Answers may vary
5.	 <p>Book</p>	Answers may vary