

## 2.MD.C.7 Elapsed Time

2.MD.C.7: Tell and write time from analog and digital clocks to the nearest five minutes


Draw clock hands to show the time 15 minutes later. Write the time.



3: 15 A.M.



\_\_\_ : \_\_\_ A.M.



8: 45 P.M.



\_\_\_ : \_\_\_ P.M.



6: 05 P.M.



\_\_\_ : \_\_\_ P.M.



9: 00 A.M.



\_\_\_ : \_\_\_ A.M.

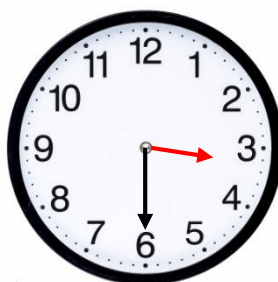
## 2.MD.C.7 Elapsed Time

2.MD.C.7: Tell and write time from analog and digital clocks to the nearest five minutes

Draw clock hands to show the time 15 minutes later. Write the time.



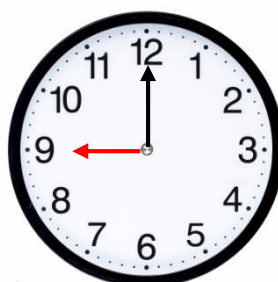
3: 15 A.M.



3 : 30 A.M.



8: 45 P.M.



9 : 00 P.M.



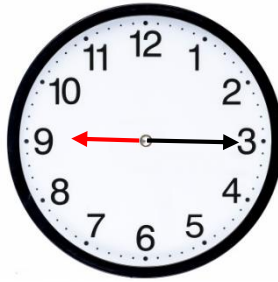
6: 05 P.M.



6 : 20 P.M.



9: 00 A.M.



9 : 15 A.M.