

## 2.MD.C.7 Time to 5 Minutes

2.MD.C.7: Tell and write time from analog and digital clocks to the nearest five minutes


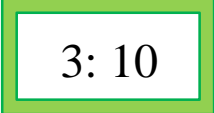

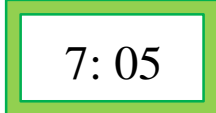

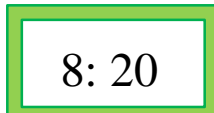

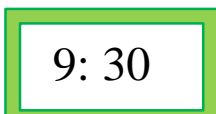
Objective: Tell and show time to 5 minutes.

Remember:

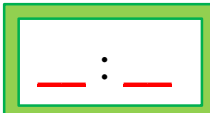
The minute hand moves from one number to the next in 5 minutes.



Draw the minute hand on each clock below.

<p>1.</p>  	<p>2.</p>  
<p>3.</p>  	<p>4.</p>  

5. My hour hand points between the 8 and 9.  
My minute hand points to the 7.  
What time do I show?




## 2.MD.C.7 Time to 5 Minutes

### Answer Key

2.MD.C.7: Tell and write time from analog and digital clocks to the nearest five minutes





Objective: Tell and show time to 5 minutes.

Remember:

The minute hand moves from one number to the next in 5 minutes.



Draw the minute hand on each clock below.

<p>1.</p>  <div style="border: 2px solid green; padding: 5px; display: inline-block; margin-left: 20px;">3:10</div>	<p>2.</p>  <div style="border: 2px solid green; padding: 5px; display: inline-block; margin-left: 20px;">7:05</div>
<p>3.</p>  <div style="border: 2px solid green; padding: 5px; display: inline-block; margin-left: 20px;">8:20</div>	<p>4.</p>  <div style="border: 2px solid green; padding: 5px; display: inline-block; margin-left: 20px;">9:30</div>

5. My hour hand points between the 8 and 9.  
My minute hand points to the 7.  
What time do I show?

8 : 35

