

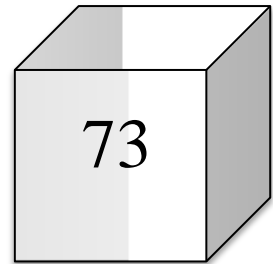
2.NBT.A.1 Place Value – Tens and Ones

2.NBT.A.1: Understand that a three-digit number represent amounts of hundreds, tens, and ones.

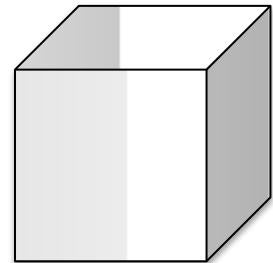
Let's add some numbers!

Add the numbers and write the total in the box.

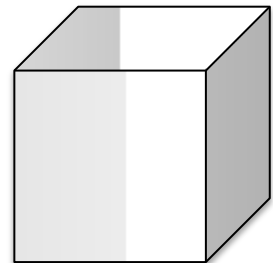
7 tens and 3 ones



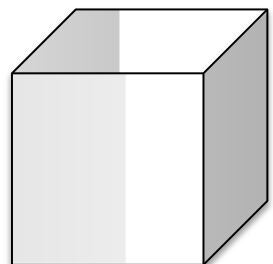
4 tens and 9 ones



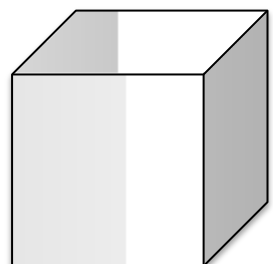
3 tens and 3 ones



9 tens and 5 ones



2 tens and 7 ones



2.NBT.A.1 Place Value – Tens and Ones

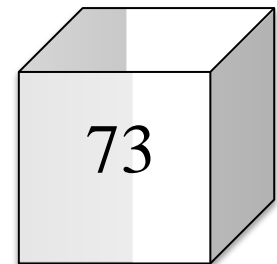
Answer Key

2.NBT.A.1: Understand that a three-digit number represent amounts of hundreds, tens, and ones.

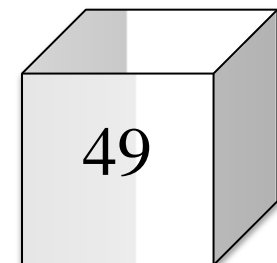
Let's add some numbers!

Add the numbers and write the total in the box.

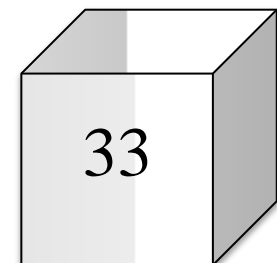
7 tens and 3 ones



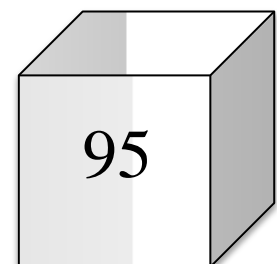
4 tens and 9 ones



3 tens and 3 ones



9 tens and 5 ones



2 tens and 7 ones

