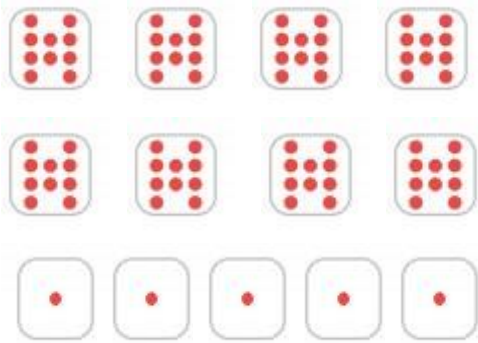


2.NBT.A.3 Writing Numbers in Expanded Form

2.NBT.A.3: Read and write numbers to 1000 using base-ten numerals, number names, and expanded form.

Write two ways to describe the meaning of the number in each item.

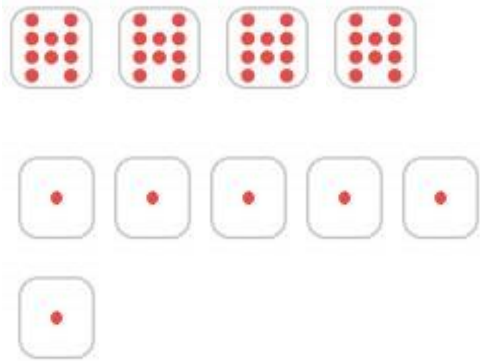
1.



85 = ____ tens and ____ ones

85 = ____ + ____

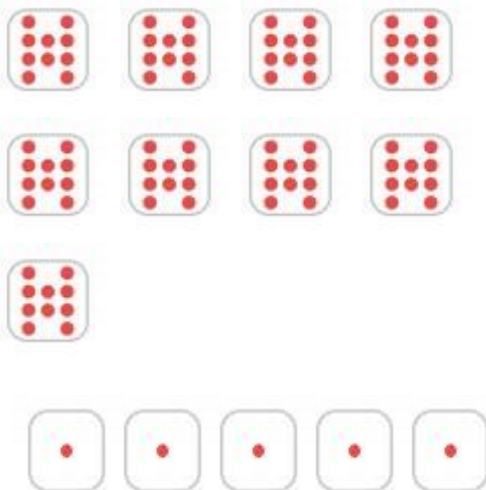
2.



46 = ____ tens and ____ ones

46 = ____ + ____

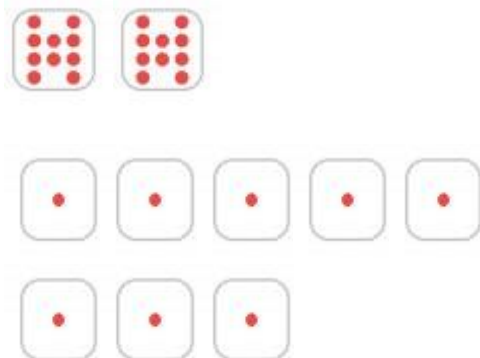
3.



95 = ____ tens and ____ ones

95 = ____ + ____

4.



28 = ____ tens and ____ ones

28 = ____ + ____

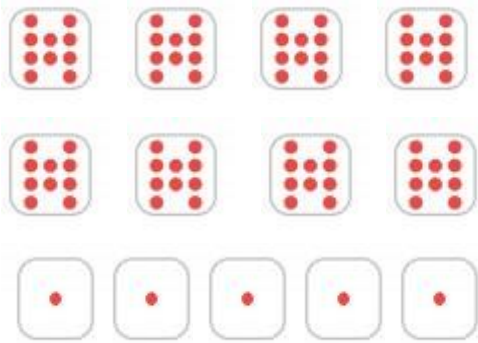
2.NBT.A.3 Writing Numbers in Expanded Form

Answer Key

2.NBT.A.3: Read and write numbers to 1000 using base-ten numerals, number names, and expanded form.

Write two ways to describe the meaning of the number in each item.

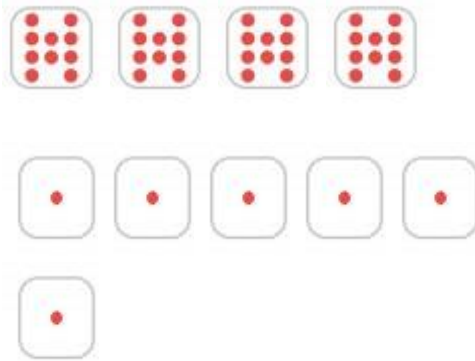
1.



$$85 = \underline{8} \text{ tens and } \underline{5} \text{ ones}$$

$$85 = \underline{80} + \underline{5}$$

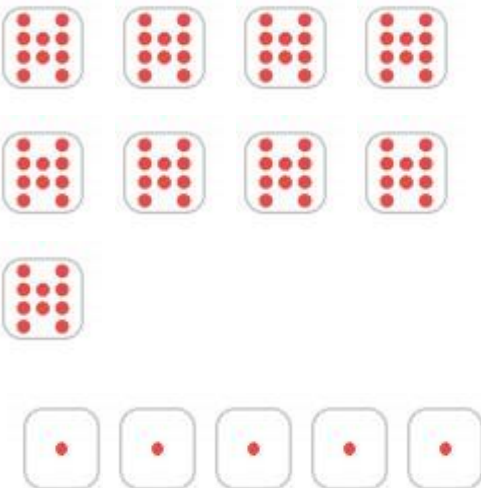
2.



$$46 = \underline{4} \text{ tens and } \underline{6} \text{ ones}$$

$$46 = \underline{40} + \underline{6}$$

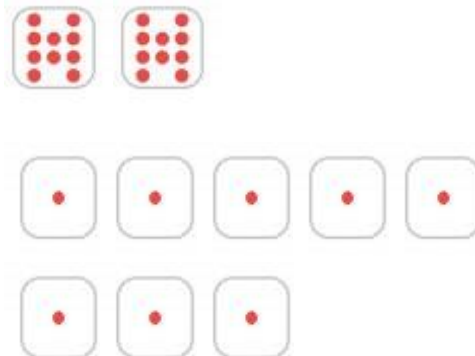
3.



$$95 = \underline{9} \text{ tens and } \underline{5} \text{ ones}$$

$$95 = \underline{90} + \underline{5}$$

4.



$$28 = \underline{2} \text{ tens and } \underline{8} \text{ ones}$$

$$28 = \underline{20} + \underline{8}$$