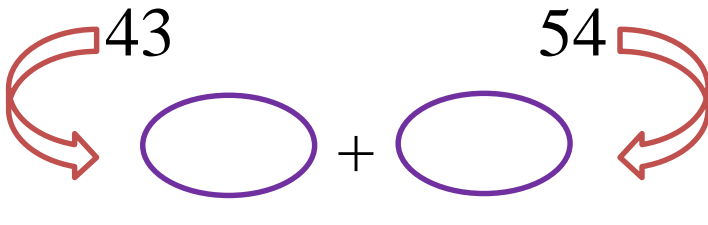

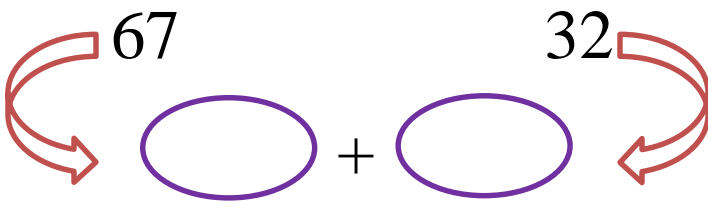



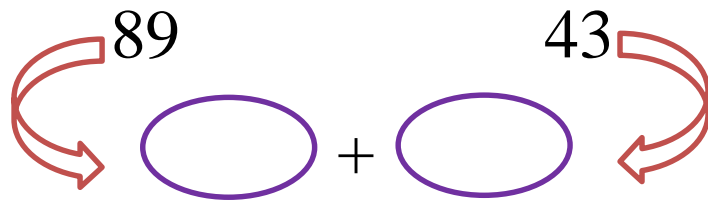

2.NBT.B.8 Adding Rounded Numbers

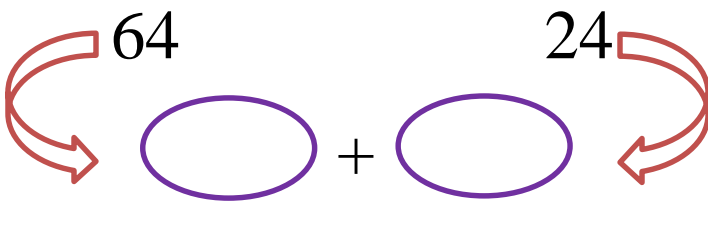

2.NBT.B.8: Mentally add 10 or 100 to a given number 100-900, and mentally subtract 10 or 100 from a given number 100-900.

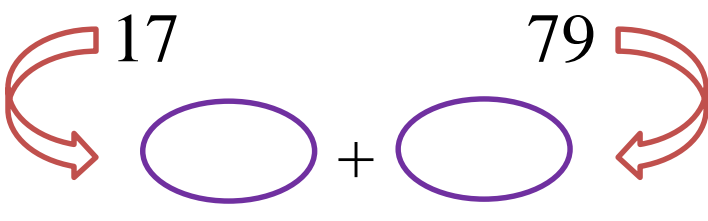

Round the numbers to the nearest 10 and then add the rounded numbers.

43 54
 $+$ $=$ 

67 32
 $+$ $=$ 

89 43
 $+$ $=$ 

64 24
 $+$ $=$ 

17 79
 $+$ $=$ 

2.NBT.B.8 Adding Rounded Numbers

Answer Key

2.NBT.B.8: Mentally add 10 or 100 to a given number 100-900, and mentally subtract 10 or 100 from a given number 100-900.

Round the numbers to the nearest 10 and then add the rounded numbers.

$$43 \rightarrow 40 + 54 \rightarrow 50 = 90$$

$$67 \rightarrow 70 + 32 \rightarrow 30 = 100$$

$$89 \rightarrow 90 + 43 \rightarrow 40 = 130$$

$$64 \rightarrow 60 + 24 \rightarrow 20 = 80$$

$$17 \rightarrow 20 + 79 \rightarrow 80 = 100$$