




## 2.OA.B.2 Subtraction Within 100 With Pictures

2.OA.B.2: Fluently add and subtract within 20 using mental strategies.

Write a subtraction sentence for each set of pictures. Then solve to find the difference.











## 2.OA.B.2 Subtraction Within 100 With Pictures

2.OA.B.2: Fluently add and subtract within 20 using mental strategies.


Write a subtraction sentence for each set of pictures. Then solve to find the difference.



$$16 - 6 = 10$$



$$17 - 4 = 13$$



$$18 - 7 = 11$$



$$13 - 8 = 5$$