


## 2.OA.C.4 Finding Products by Adding Objects


2.OA.C.4: Use addition to find the total number of objects arranged in rectangular arrays.

Circle the correct answer for each multiplication sentence.




$$3 \times 3 =$$

6    9    12



$$2 \times 4 =$$

4    6    8



$$5 \times 3 =$$

5    9    15




$$3 \times 8 =$$

24    12    8

## 2.OA.C.4 Finding Products by Adding Objects


2.OA.C.4: Use addition to find the total number of objects arranged in rectangular arrays.

Circle the correct answer for each multiplication sentence.




$$3 \times 3 =$$

6   9   12



$$2 \times 4 =$$

4   6   8



$$5 \times 3 =$$

5   9   15



$$3 \times 8 =$$

24   12   8