

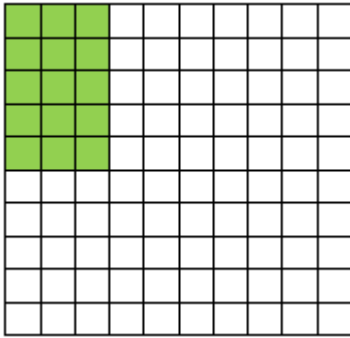


## 2.OA.C.4 Understanding Multiplication Sentences

2.OA.C.4: Use addition to find the total number of objects arranged in rectangular arrays.

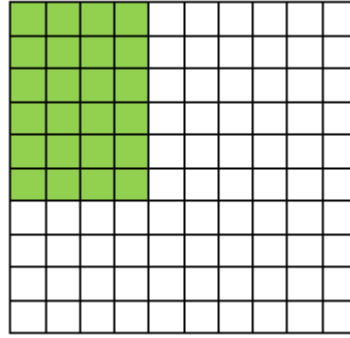
Write the multiplication sentence shown by each array.

1.




3 x 5 = 15

2.



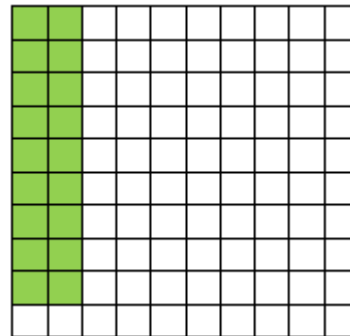
4 x 6 = 24

3.




6 x 5 = 30

4.



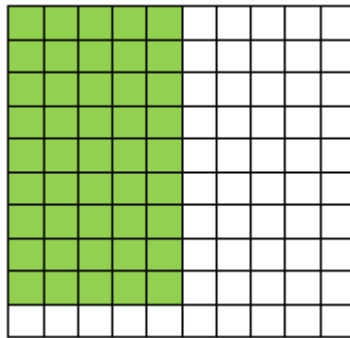
2 x 9 = 18

5.



7 x 8 = 56

6.



5 x 9 = 45