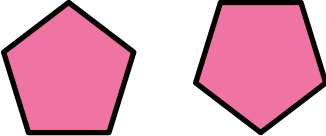


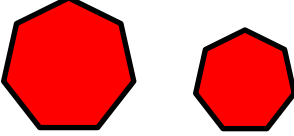

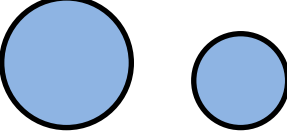


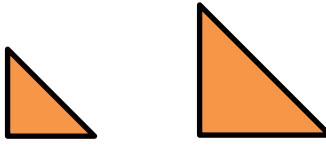


Congruent and Similar Figures


3.G.A.1: Understand the shapes in different categories.

Similar means same shape. **Congruent** means same shape and size.

Look at each pair of shapes in the box. Tell how the figures are related. Choose the correct answer.

 <p> <input type="radio"/> congruent <input type="radio"/> similar </p>	 <p> <input type="radio"/> congruent <input type="radio"/> similar </p>	 <p> <input type="radio"/> congruent <input type="radio"/> similar </p>
 <p> <input type="radio"/> congruent <input type="radio"/> similar </p>	 <p> <input type="radio"/> congruent <input type="radio"/> similar </p>	 <p> <input type="radio"/> congruent <input type="radio"/> similar </p>
 <p> <input type="radio"/> congruent <input type="radio"/> similar </p>	 <p> <input type="radio"/> congruent <input type="radio"/> similar </p>	 <p> <input type="radio"/> congruent <input type="radio"/> similar </p>

Which figure appears to be congruent to the picture shown in the box?



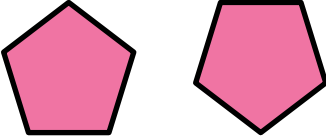


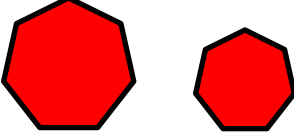

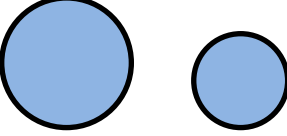


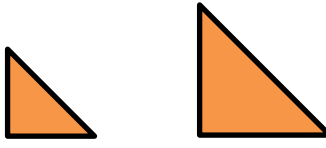
Congruent and Similar Figures

Answer Key

3.G.A.1: Understand the shapes in different categories.

Similar means same shape. **Congruent** means same shape and size.

Look at each pair of shapes in the box. Tell how the figures are related. Choose the correct answer.

 <p> <input checked="" type="radio"/> congruent <input type="radio"/> similar </p>	 <p> <input checked="" type="radio"/> congruent <input type="radio"/> similar </p>	 <p> <input type="radio"/> congruent <input checked="" type="radio"/> similar </p>
 <p> <input type="radio"/> congruent <input checked="" type="radio"/> similar </p>	 <p> <input checked="" type="radio"/> congruent <input type="radio"/> similar </p>	 <p> <input type="radio"/> congruent <input checked="" type="radio"/> similar </p>
 <p> <input type="radio"/> congruent <input checked="" type="radio"/> similar </p>	 <p> <input checked="" type="radio"/> congruent <input type="radio"/> similar </p>	 <p> <input type="radio"/> congruent <input checked="" type="radio"/> similar </p>

Which figure appears to be congruent to the picture shown in the box?

