





## 3.G.A.1 Identifying Polygons

3.G.A.1: Understand the shapes in different categories.

Name each polygon. Write the correct number of sides.

<p>1</p> 	<p>2</p> 
<p>3</p> 	<p>4</p> 

Tell whether each figure is a polygon. Write yes or no.

<p>5</p> 	<p>6</p> 
<p>7</p> 	<p>8</p> 


Solution:

- 1 \_\_\_\_\_
- 2 \_\_\_\_\_
- 3 \_\_\_\_\_
- 4 \_\_\_\_\_
- 5 \_\_\_\_\_
- 6 \_\_\_\_\_
- 7 \_\_\_\_\_
- 8 \_\_\_\_\_

How many angles does a pentagon have?

Draw a pentagon in the box.

- a) four      b) six      c) five      d) seven



### 3.G.A.1 Identifying Polygons





Answer Key

3.G.A.1: Understand the shapes in different categories.

Name each polygon. Write the correct number of sides.

<p>1</p> 	<p>2</p> 
<p>3</p> 	<p>4</p> 

Tell whether each figure is a polygon. Write yes or no.

<p>5</p> 	<p>6</p> 
<p>7</p> 	<p>8</p> 

Solution:

1 pentagon, 5 sides

2 octagon, 8 sides

3 square, 4 sides

4 triangle, 3 sides

5 yes

6 no

7 no

8 yes

How many angles does a pentagon have?

Draw a pentagon in the box.

- a) four      b) six      **c) five**      d) seven

