



3.G.A.2 Equal Parts

3.G.A.2: Partition shapes into parts with equal areas.


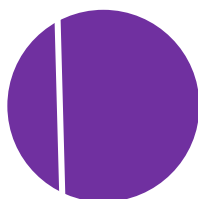






These are three **equal parts**.
They have the same size and shape.



These three parts are not equal.


Circle the shapes that have equal parts.




3.G.A.2 Equal Parts

Answer Key

3.G.A.2: Partition shapes into parts with equal areas.



These are three **equal parts**.
They have the same size and shape.



These three parts are not equal.

Circle the shapes that have equal parts.

