

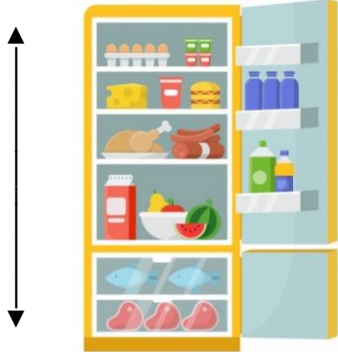


## 3.MD.B.4 Choosing Appropriate Customary Units of Length

3.MD.B.4: Generate measurement data by measuring lengths using rulers.

Choose the unit you would use to measure each. Write inch, foot, yard, or mile.

<p>1.</p>  <div style="border: 1px solid black; width: 250px; height: 30px; margin-top: 10px;"></div>	<p>2.</p>  <div style="border: 1px solid black; width: 250px; height: 30px; margin-top: 10px;"></div>	<p>3.</p>  <div style="border: 1px solid black; width: 250px; height: 30px; margin-top: 10px;"></div>
--	--	--

4. Vic saw an elephant at the zoo. What unit should Vic use to tell the height of the elephant?

---

5. Rene is going to jog to the park. The park is 3 blocks away from their house. What unit best measures how far Rene will have to jog?

---

6. Harold's older brother is in 8<sup>th</sup> grade. What unit would you choose to measure how tall Harold's brother is?

---

7. Our family is going to visit my grandmother in another state. Will we travel 100 inches, 100 feet, 100 yards, or 100 miles?

---

8. My little sister was born last week. What unit would best determine how tall my sister is?



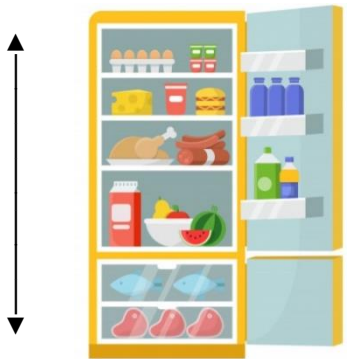
---

3.MD.B.4 Choosing Appropriate Customary Units of Length

Answer Key

3.MD.B.4: Generate measurement data by measuring lengths using rulers.

Choose the unit you would use to measure each. Write inch, foot, yard, or mile.

<p>1.</p>  <p>foot</p>	<p>2.</p>  <p>inch</p>	<p>3.</p>  <p>foot</p>
---	---	---

4. Vic saw an elephant at the zoo. What unit should Vic use to tell the height of the elephant?

foot

5. Rene is going to jog to the park. The park is 3 blocks away from their house. What unit best measures how far Rene will have to jog?

mile

6. Harold's older brother is in 8<sup>th</sup> grade. What unit would you choose to measure how tall Harold's brother is?

foot

7. Our family is going to visit my grandmother in another state. Will we travel 100 inches, 100 feet, 100 yards, or 100 miles?

100 miles

8. My little sister was born last week. What unit would best determine how tall my sister is?

inch