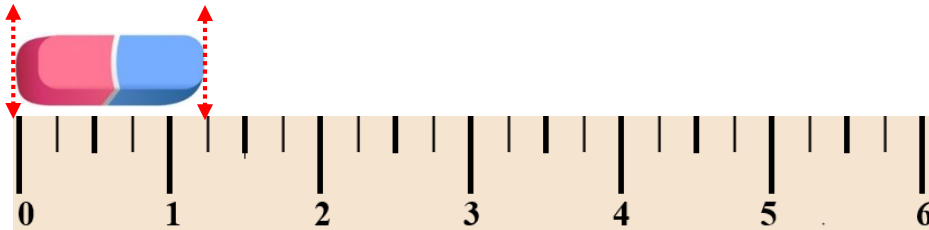


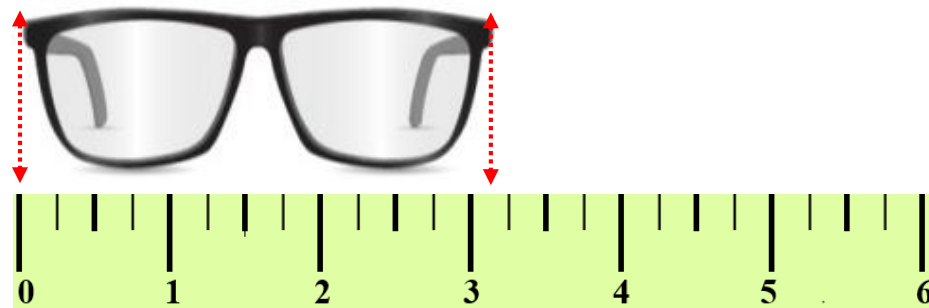
3.MD.B.4 Measuring Lengths Using Rulers – Part 2

3.MD.B.4: Generate measurement data by measuring lengths using rulers.

Measure the length to the quarter inch.



Answer:



Answer:

Read and solve. Use a ruler.

Susan is measuring her marker. It is 7 and a half inches long. Between which two inch marks is the end of the marker?

Answer:

Paula said that her watch is 5 inches long. Describe her error.



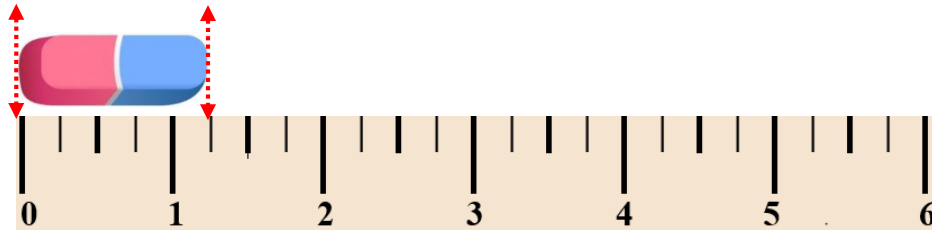
Answer:

3.MD.B.4 Measuring Lengths Using Rulers – Part 2

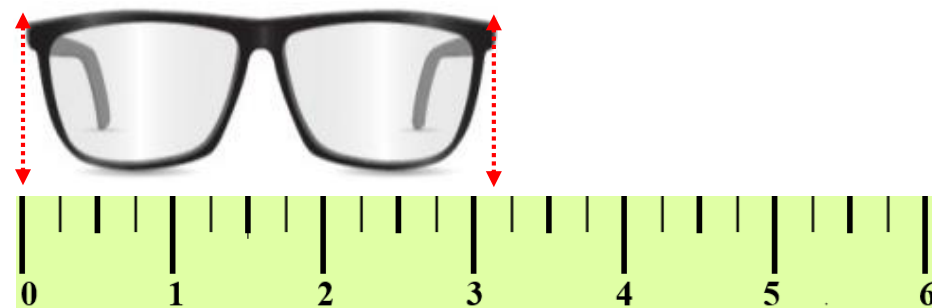
Answer Key

3.MD.B.4: Generate measurement data by measuring lengths using rulers.

Measure the length to the quarter inch.



Answer:
 $1\frac{1}{4}$



Answer:
 $3\frac{1}{4}$

Read and solve. Use a ruler.

Susan is measuring her marker. It is 7 and a half inches long. Between which two inch marks is the end of the marker?

Answer:
7 and 8

Paula said that her watch is 5 inches long. Describe her error.



Answer:
The measurement of the watch did not start with 0 mark on the ruler. Hence, the watch is not 4 inches long.