






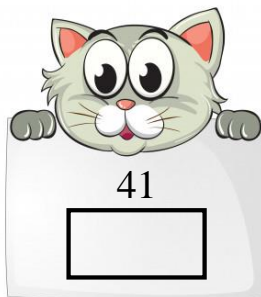


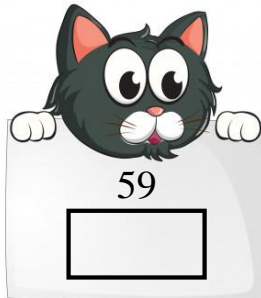



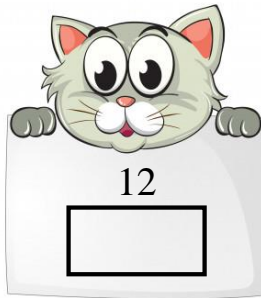


## Rounding Numbers (Nearest 10)

3.NBT.A.1: Use place value understanding to round whole numbers to the nearest 10 or 100.

Round the following number to the nearest 10. Write your answer in the box.



# Rounding Numbers (Nearest 10)

Answer Key

3.NBT.A.1: Use place value understanding to round whole numbers to the nearest 10 or 100.

Round the following number to the nearest 10. Write your answer in the box.

12  
10

39  
40

99  
100

13  
10

59  
60

85  
90

28  
30

85  
90

41  
40

52  
50

68  
70

73  
70

19  
20

81  
80

62  
60

34  
30