

## 3.NBT.A.1 Rounding Numbers to the Nearest 100

3.NBT.A.1: Use place value understanding to round whole numbers to the nearest 10 or 100.

















Round the following numbers to the nearest 100. Write your answer inside the box below each number.

If the tens number is 5 or greater, round up to the nearest 100.  
If the tens number is 4 or less, round down to the nearest 100.

Example:

$$\underline{4}27 \rightarrow 400$$

$$2\underline{7}2 \rightarrow 300$$

 440 <input type="text"/>	 435 <input type="text"/>	 705 <input type="text"/>	 949 <input type="text"/>
 567 <input type="text"/>	 518 <input type="text"/>	 122 <input type="text"/>	 198 <input type="text"/>
 331 <input type="text"/>	 275 <input type="text"/>	 296 <input type="text"/>	 115 <input type="text"/>
 629 <input type="text"/>	 384 <input type="text"/>	 224 <input type="text"/>	 629 <input type="text"/>

### 3.NBT.A.1 Rounding Numbers to the Nearest 100

















Answer Key

3.NBT.A.1: Use place value understanding to round whole numbers to the nearest 10 or 100.

Round the following numbers to the nearest 100. Write your answer inside the box below each number.

If the tens number is 5 or greater, round up to the nearest 100.  
 If the tens number is 4 or less, round down to the nearest 100.

Example:  
 $4\underline{2}7 \rightarrow 400$                        $2\underline{7}2 \rightarrow 300$

 440 400	 435 400	 705 700	 949 900
 567 600	 518 500	 122 100	 198 200
 331 300	 275 300	 296 300	 115 100
 629 600	 384 400	 224 200	 629 600