

3.NBT.A.2 Finishing Fact Families

3.NBT.A.2: Fluently add and subtract within 1000.

Finish each fact family below. Write the missing numbers on the line.



$$12 + 6 = \underline{\quad}$$




$$6 + \underline{\quad} = 18$$



$$18 - \underline{\quad} = 12$$



$$18 - 12 = \underline{\quad}$$



$$15 + 10 = \underline{\quad}$$



$$10 + \underline{\quad} = 25$$



$$25 - \underline{\quad} = 15$$



$$25 - \underline{\quad} = 10$$



$$15 + 17 = \underline{\quad}$$



$$17 + \underline{\quad} = 32$$



$$\underline{\quad} - 15 = 17$$



$$32 - 17 = \underline{\quad}$$


3.NBT.A.2 Finishing Fact Families


Answer Key


3.NBT.A.2: Fluently add and subtract within 1000.


Finish each fact family below. Write the missing numbers on the line.





 $12 + 6 = \underline{18}$


 $6 + \underline{12} = 18$


 $18 - \underline{6} = 12$


 $18 - 12 = \underline{6}$




 $15 + 10 = \underline{25}$


 $10 + \underline{15} = 25$


 $25 - \underline{10} = 15$


 $25 - \underline{15} = 10$



 $15 + 17 = \underline{32}$

 $17 + \underline{15} = 32$

 $\underline{32} - 15 = 17$

 $32 - 17 = \underline{15}$