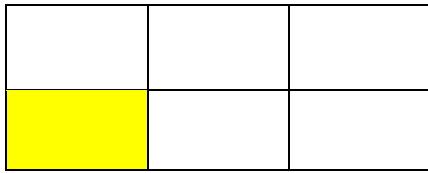


3.NF.A.1 Identifying Fractions

3.NF.A.1: Understand a fraction $1/b$ as the quantity formed by 1 part when a whole is partitioned into b equal parts; understand a fraction a/b as the quantity formed by a parts of size $1/b$.

Write the fraction (in number and word) of each colored part shown below.



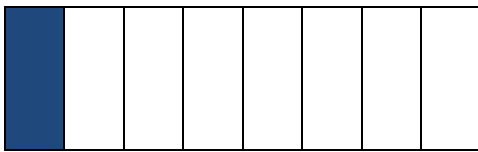
Number:

Word:



Number:

Word:




Number:

Word:



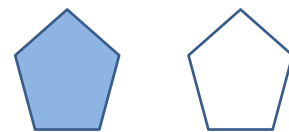
Number:

Word:



Number:

Word:



Number:


Word:

3.NF.A.1 Identifying Fractions

Answer Key

3.NF.A.1: Understand a fraction $1/b$ as the quantity formed by 1 part when a whole is partitioned into b equal parts; understand a fraction a/b as the quantity formed by a parts of size $1/b$.


Write the fraction (in number and word) of each colored part shown below.



Number: $\frac{1}{6}$
 Word: one-sixth



Number: $\frac{1}{4}$
 Word: one-fourth



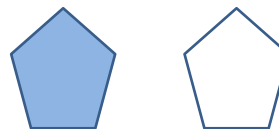
Number: $\frac{1}{8}$
 Word: one-eighth



Number: $\frac{1}{6}$
 Word: one-sixth



Number: $\frac{1}{2}$
 Word: one-half



Number: $\frac{1}{2}$
 Word: one-half