

3.OA.C.7 Drawing Arrays and Writing Multiplication Sentences

3.OA.C.7: Fluently multiply and divide within 100 using strategies.

Draw each array. Write the multiplication sentence. Box the square number in each sentence.

Draw

1. 6×6

Multiplication sentence:

2. 9×9

Multiplication sentence:

3. 4×4

Multiplication sentence:

4. 8×8

Multiplication sentence:

3.OA.C.7 Drawing Arrays and Writing Multiplication Sentences

3.OA.C.7: Fluently multiply and divide within 100 using strategies.


Draw each array. Write the multiplication sentence. Box the square number in each sentence.

Draw

1. 6×6

Multiplication sentence:


$6 \times 6 =$ 36



2. 9×9

Multiplication sentence:


$9 \times 9 =$ 81



3. 4×4

Multiplication sentence:

$4 \times 4 =$ 16



4. 8×8

Multiplication sentence:

$8 \times 8 =$ 64

