






4.NF.C.6 Relating Fractions, Decimals, and Money

4.NF.C.6: Use decimal notation for fractions with denominators 10 or 100.

Complete the table below by writing the amount of money shown and then writing it as a fraction of a dollar.

Coins	Amount of Money	Fraction
		
		
		
		
		
		

4.NF.C.6 Relating Fractions, Decimals, and Money

Answer Key

4.NF.C.6: Use decimal notation for fractions with denominators 10 or 100.

Complete the table below by writing the amount of money shown and then writing it as a fraction of a dollar.

Coins	Amount of Money	Fraction
	0.41	$\frac{41}{100}$
	0.76	$\frac{76}{100}$
	0.53	$\frac{53}{100}$
	0.78	$\frac{78}{100}$
	0.53	$\frac{53}{100}$
	0.08	$\frac{8}{100}$