



## 4.OA.C.5 Completing the Growing Patterns

4.OA.C.5: Generate a number or shape pattern that follows a given rule. Identify apparent features of the pattern that were not explicit in the rule itself.

Draw to show the growing pattern.

1.



\_\_\_\_\_

2.



\_\_\_\_\_

3.



\_\_\_\_\_

4.



\_\_\_\_\_

5.



\_\_\_\_\_


# 4.OA.C.5 Completing the Growing Patterns

## Answer Key

4.OA.C.5: Generate a number or shape pattern that follows a given rule. Identify apparent features of the pattern that were not explicit in the rule itself.

Draw to show the growing pattern.

1.



2.



3.



4.



5.

