











4.OA.C.5 Completing the Pattern



4.OA.C.5: Generate a number or shape pattern that follows a given rule. Identify apparent features of the pattern that were not explicit in the rule itself.


Draw and color the shape that would complete each pattern.











4.OA.C.5 Completing the Pattern

Answer Key

4.OA.C.5: Generate a number or shape pattern that follows a given rule. Identify apparent features of the pattern that were not explicit in the rule itself.

Draw and color the shape that would complete each pattern.

