






4.OA.C.5 Continuing the Patterns

4.OA.C.5: Generate a number or shape pattern that follows a given rule. Identify apparent features of the pattern that were not explicit in the rule itself.

Continue the shape patterns below.







Continue the number patterns below.

2 3 4 2 3 _____

2 3 3 2 3 _____










2 3 4 5 2 _____

4.OA.C.5 Continuing the Patterns

Answer Key

4.OA.C.5: Generate a number or shape pattern that follows a given rule. Identify apparent features of the pattern that were not explicit in the rule itself.

Continue the shape patterns below.



Continue the number patterns below.

2 3 4 2 3 4 2 3 4 2

2 3 3 2 3 3 2 3 3 2

2 3 4 5 2 3 4 5 2 3