


## 4.OA.C.5 Determining the Next Image


4.OA.C.5: Generate a number or shape pattern that follows a given rule. Identify apparent features of the pattern that were not explicit in the rule itself.

Cut and paste the pictures in the boxes to complete the patterns below.


1.




2.



3.



4.



## 4.OA.C.5 Determining the Next Image

### Answer Key

4.OA.C.5: Generate a number or shape pattern that follows a given rule. Identify apparent features of the pattern that were not explicit in the rule itself.

Cut and paste the pictures in the boxes to complete the patterns below.

1.



2.



3.



4.

