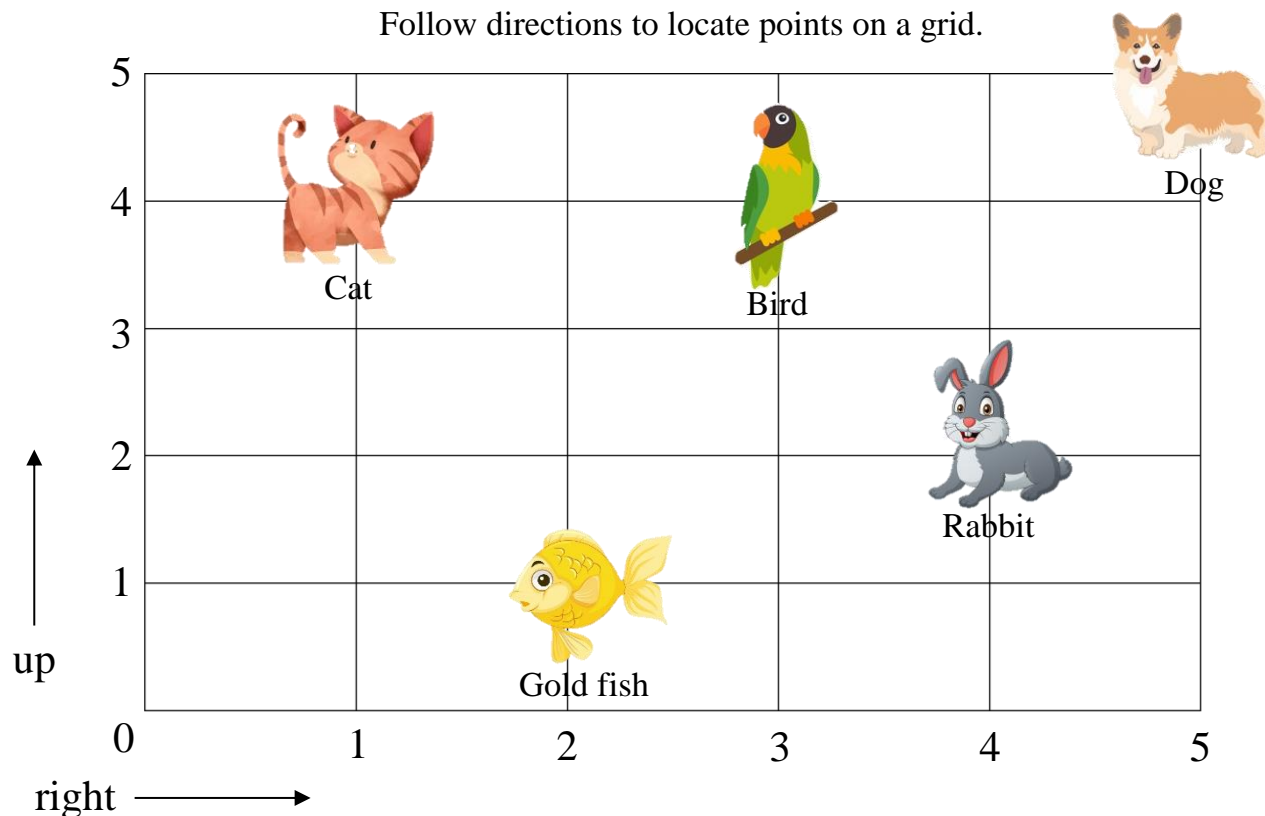


5.OA.B.3 Locate Points on a Grid- I

5.OA.B.3 Graph the ordered pairs on a coordinate plane

Follow directions to locate points on a grid.



Use the grid above. Follow the directions. Circle the pet that you find.

1. Start at 0. Go right 4.
Go up 2. Which pet did you find?



2. Start at 0. Go right 2.
Go up 1. Which pet did you find?



3. Start at 0. Go right 5.
Go up 5. Which pet did you find?



4. Start at 0. Go right 1.
Go up 4. Which pet did you find?

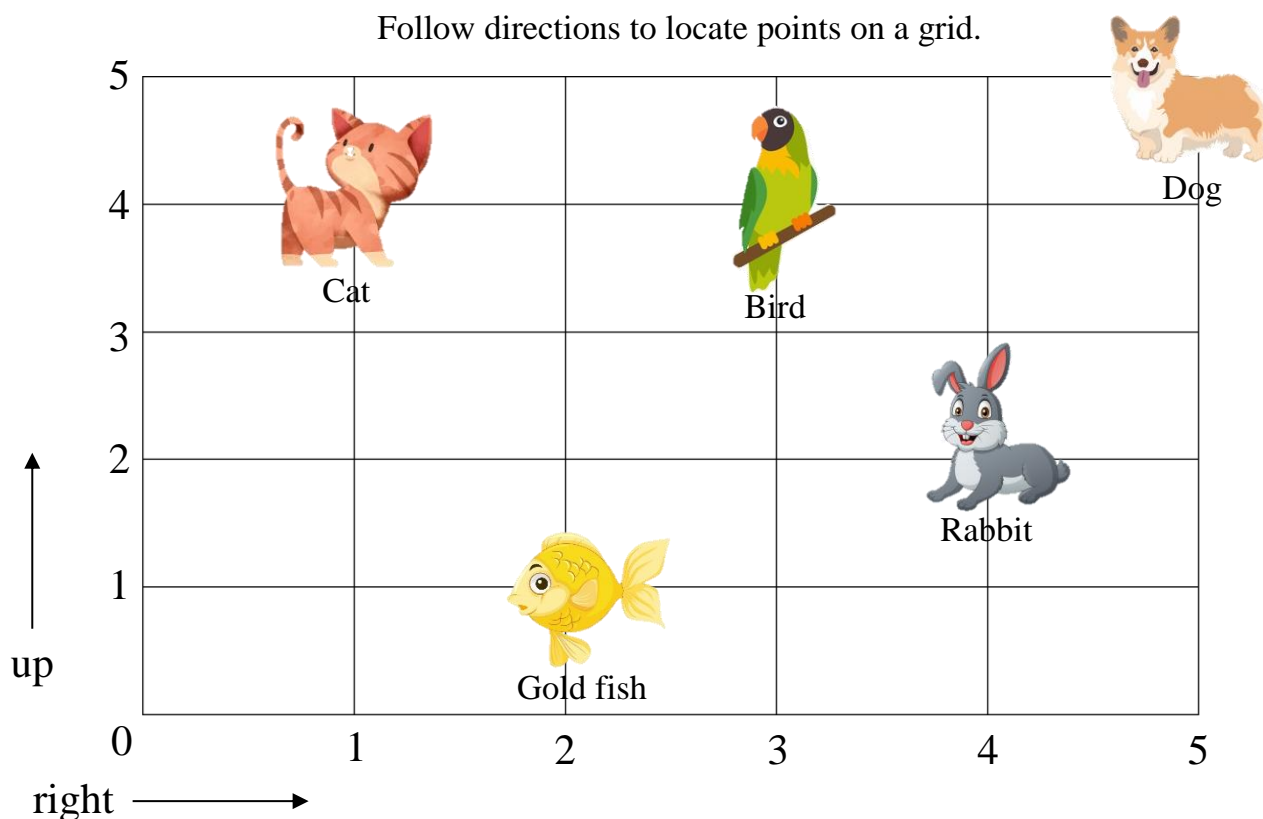


5.OA.B.3 Locate Points on a Grid- I

Answer Key

5.OA.B.3 Graph the ordered pairs on a coordinate plane

Follow directions to locate points on a grid.




Use the grid above. Follow the directions. Circle the pet that you find.

1. Start at 0. Go right 4.
Go up 2. Which pet did you find?



2. Start at 0. Go right 2.
Go up 1. Which pet did you find?



3. Start at 0. Go right 5.
Go up 5. Which pet did you find?



4. Start at 0. Go right 1.
Go up 4. Which pet did you find?

