

## Comparing Numbers (3 to 4 Digits)

Use the symbols  $<$ ,  $>$ , or  $=$  to compare the numbers.

$5,443 \underline{\hspace{2cm}} 5,444$

$3,927 \underline{\hspace{2cm}} 3,987$

$747 \underline{\hspace{2cm}} 774$

$258 \underline{\hspace{2cm}} 147$

$808 \underline{\hspace{2cm}} 880$

$2,785 \underline{\hspace{2cm}} 2,524$

$4,286 \underline{\hspace{2cm}} 4,014$

$872 \underline{\hspace{2cm}} 1,486$

$6,926 \underline{\hspace{2cm}} 6,926$

$4,185 \underline{\hspace{2cm}} 5,247$

$4,974 \underline{\hspace{2cm}} 4,794$

$356 \underline{\hspace{2cm}} 412$

Read and analyze the problem then answer each question below. Write your answer on the line.

Karen, Cristina, and Paula are reading the same book. So far, Karen has read 321 pages. Cristina has read 312 pages, and Paula has read 341 pages.


1. Who has read the most number of pages?

\_\_\_\_\_

2. Who has read the least number of pages?

\_\_\_\_\_

Which number has more hundreds? Box the greater number.



305

207

Comparing Numbers (3 to 4 Digits)

Answer Key

Use the symbols  $<$ ,  $>$ , or  $=$  to compare the numbers.

5,443  $<$  5,444

3,927  $<$  3,987

747  $<$  774

258  $>$  147

808  $<$  880

2,785  $>$  2,524

4,286  $>$  4,014

872  $<$  1,486

6,926  $=$  6,926

4,185  $<$  5,247

4,974  $>$  4,794

356  $<$  412

Read and analyze the problem then answer each question below. Write your answer on the line.

Karen, Cristina, and Paula are reading the same book. So far, Karen has read 321 pages. Cristina has read 312 pages, and Paula has read 341 pages.

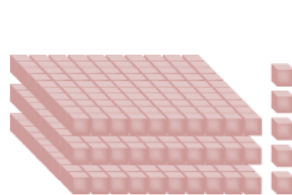
1. Who has read the most number of pages?

Paula


2. Who has read the least number of pages?

Cristina

Which number has more hundreds? Box the greater number.



305



207