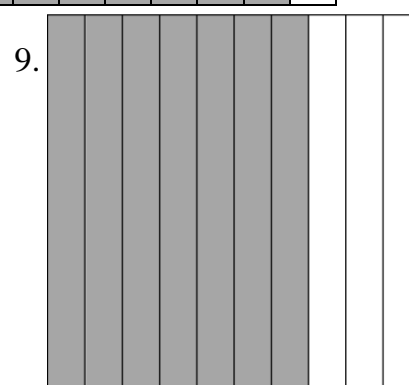



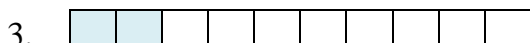
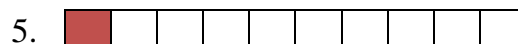
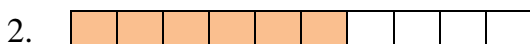
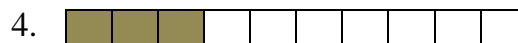



Fractions and Decimals in Tenths

Write the fraction and decimal form represented by the shaded part.



Answers:

1.

4.

7.

2.

5.

8.

3.

6.

9.

Write each fraction as a decimal.

Fraction	Decimal
$\frac{5}{10}$	
$\frac{3}{10}$	
$\frac{9}{10}$	
$\frac{1}{10}$	
seven tenths	
four tenths	
eight tenths	

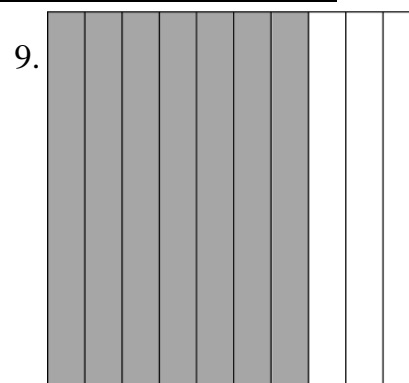


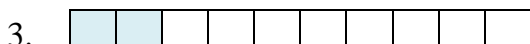
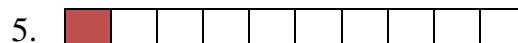
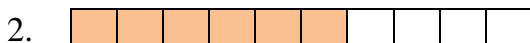
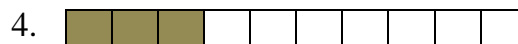
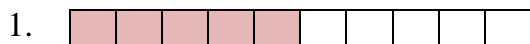
Write each decimal as a fraction.

Decimal	Fraction
0.2	
0.6	

Fractions and Decimals in Tenths

Answer Key

Write the fraction and decimal form represented by the shaded part.



Answers:

1. $\frac{5}{10}$, 0.5
2. $\frac{6}{10}$, 0.6
3. $\frac{2}{10}$, 0.2

4. $\frac{3}{10}$, 0.3
5. $\frac{1}{10}$, 0.1
6. $\frac{9}{10}$, 0.9

7. $\frac{4}{10}$, 0.4
8. $\frac{3}{10}$, 0.3
9. $\frac{7}{10}$, 0.7

Write each fraction as a decimal.

Fraction	Decimal
$\frac{5}{10}$	0.5
$\frac{3}{10}$	0.3
$\frac{9}{10}$	0.9
$\frac{1}{10}$	0.1
seven tenths	0.7
four tenths	0.4
eight tenths	0.8

Write each decimal as a fraction.

Decimal	Fraction
0.2	$\frac{2}{10}$
0.6	$\frac{6}{10}$