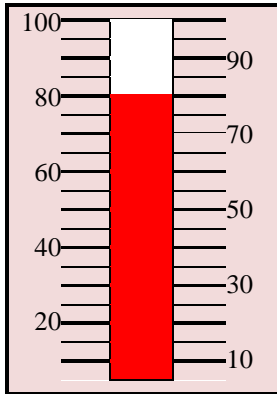


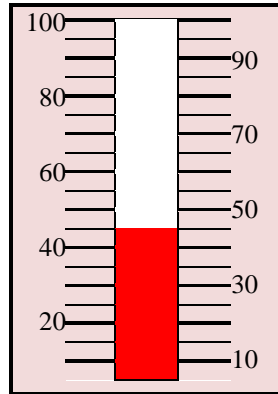
Reading Temperatures (in Fahrenheit)

Write each temperature in Fahrenheit.

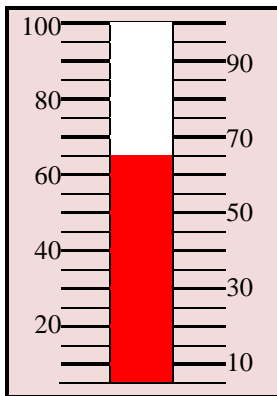
1.



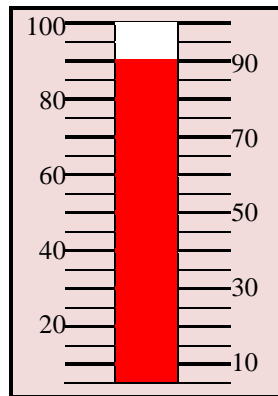
2.



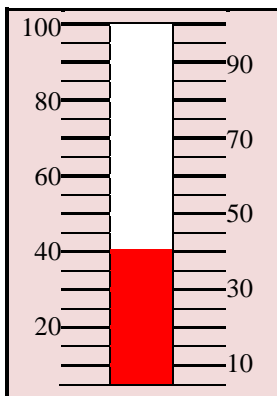
3.



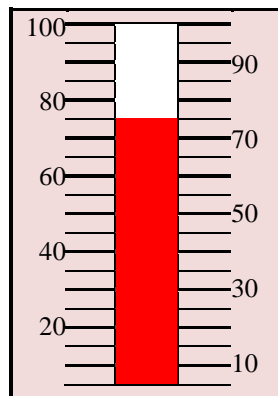
4.



5.



6.



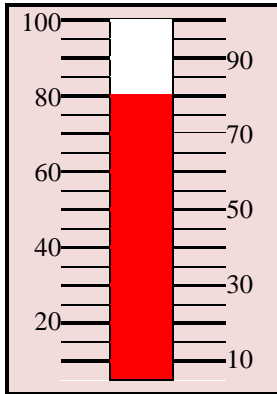
Solution	
1.	_____
2.	_____
3.	_____
4.	_____
5.	_____
6.	_____

Solution

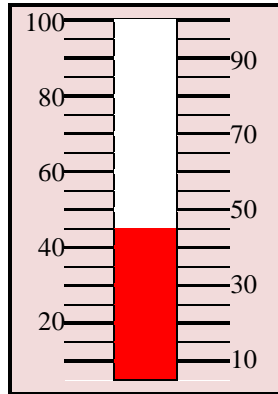
7. It is 30 °F outside. What activity can Bernard do at this temperature? What clothes do you think he might wear?

Write each temperature in Fahrenheit.

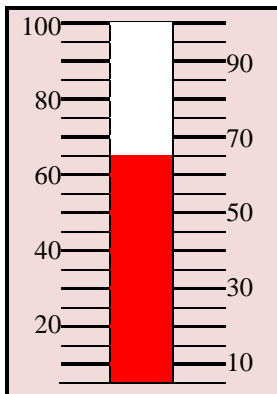
1.



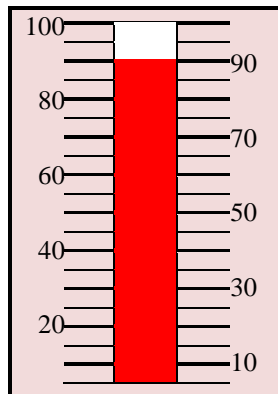
2.



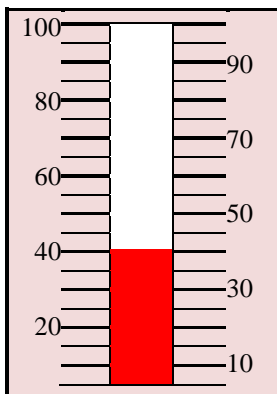
3.



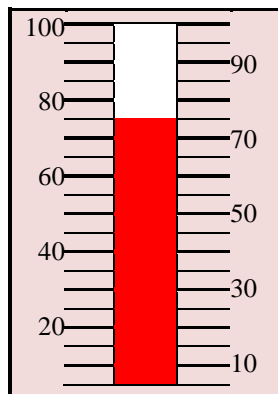
4.



5.



6.



Solution	
1.	80 °F
2.	45 °F
3.	65 °F
4.	90 °F
5.	40 °F
6.	75 °F

Solution

7. It is 30 °F outside. What activity can Bernard do at this temperature? What clothes do you think he might wear?

Bernard could go ice skating outside. He should wear winter clothes like jacket, jeans, mittens, scarf, gloves, and socks.